

**HOME ASSIGNMENT**

**1. Fill in the blanks :**

- a. The national flag of India is \_\_\_\_\_.
- b. Every country has its own \_\_\_\_\_ symbols.
- c. Telephones that are connected by wires are called \_\_\_\_\_ phones.
- d. \_\_\_\_\_ is a computer network all over the world.
- e. \_\_\_\_\_ are electronic mails.
- f. The national anthem of India is \_\_\_\_\_.
- g. Our national song was written by \_\_\_\_\_.
- h. Tigers are \_\_\_\_\_ animals.
- i. \_\_\_\_\_ helps us send messages to a large number of people.
- j. \_\_\_\_\_ can be sent in envelopes.

**2. Match the following :**

**Column A**

**Column B**

- |                   |                     |
|-------------------|---------------------|
| a) Communication  | latest news         |
| b) Newspaper      | sender and receiver |
| c) Websites       | mango               |
| d) Vande Mataram  | Internet sites      |
| e) National fruit | national song       |

**3. Write true or false :**

- a. The words Satyameva Jayate mean "Truth never wins".  
\_\_\_\_\_
- b. The national flag of India is popularly known as the Trianga.  
\_\_\_\_\_
- c. Mango is a rich source of vitamins. \_\_\_\_\_
- d. The apple is the national fruit of India. \_\_\_\_\_
- e. Mobile phones are also called cellular phones. \_\_\_\_\_
- f. Communication means sending messages only. \_\_\_\_\_
- g. Signals are not electronic information. \_\_\_\_\_
- h. Letters can be sent in envelopes. \_\_\_\_\_
- i. Websites are internet sites that do not contain information. \_\_\_\_\_
- j. Mass communication helps us send messages to one person at a same time. \_\_\_\_\_

**4. Draw the following pictures :**

- a. National flag

b. National tree

c. National bird

d. National animal

# OPEN MINDS - A BIRLA SCHOOL, KANKARBAGH

NAME : \_\_\_\_\_

DATE : \_\_\_\_\_

Subject : ICT

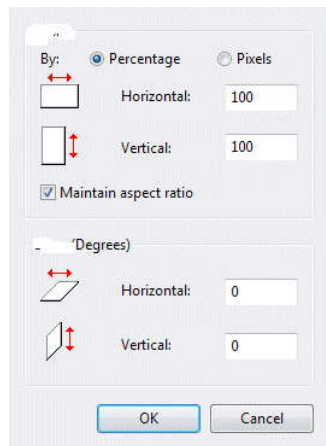
GRADE - 3

## HOME ASSIGNMENT

1. Identify the pictures and choose the correct option from the given box. :

Resize and skew window, fill with color, shapes , clipboard area, color palette

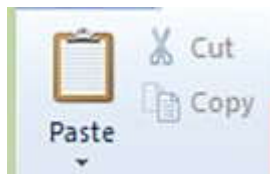
a.



b.



c.



d.



Teacher's Signature :

Parent's Signature :

e.



**2. Fill in the blanks with correct words :**

redo, zoom out, resize, skew, undo

1. You can use the \_\_\_\_\_ option to increase the size of an image.
2. The \_\_\_\_\_ option is used to twist an image in the horizontal or vertical direction.
3. The \_\_\_\_\_ command is used to reverse the last action performed.
4. The \_\_\_\_\_ option is used to reverse the effect of undo.
5. The \_\_\_\_\_ option shows a smaller view of the image.

**3. Write the steps to open paint window.**

---

---

---

---

---

**4. Choose the correct option :**

1. Which of the following option would allow you to select an irregular part of an image?

- a. Rectangular selection
- b. Free –form selection
- c. Select all
- d. Insert selection

2. Which group contains the cut, copy and paste commands

- a. Image
- b. Tools
- c. Shapes
- d. Clipboard

3. Which of these options is used to get the mirror image of a drawing?

- a. Flip
- b. Rotate
- c. Resize
- d. Skew

4. Which of the following keyboard shortcuts will open the resize and skew dialog box?

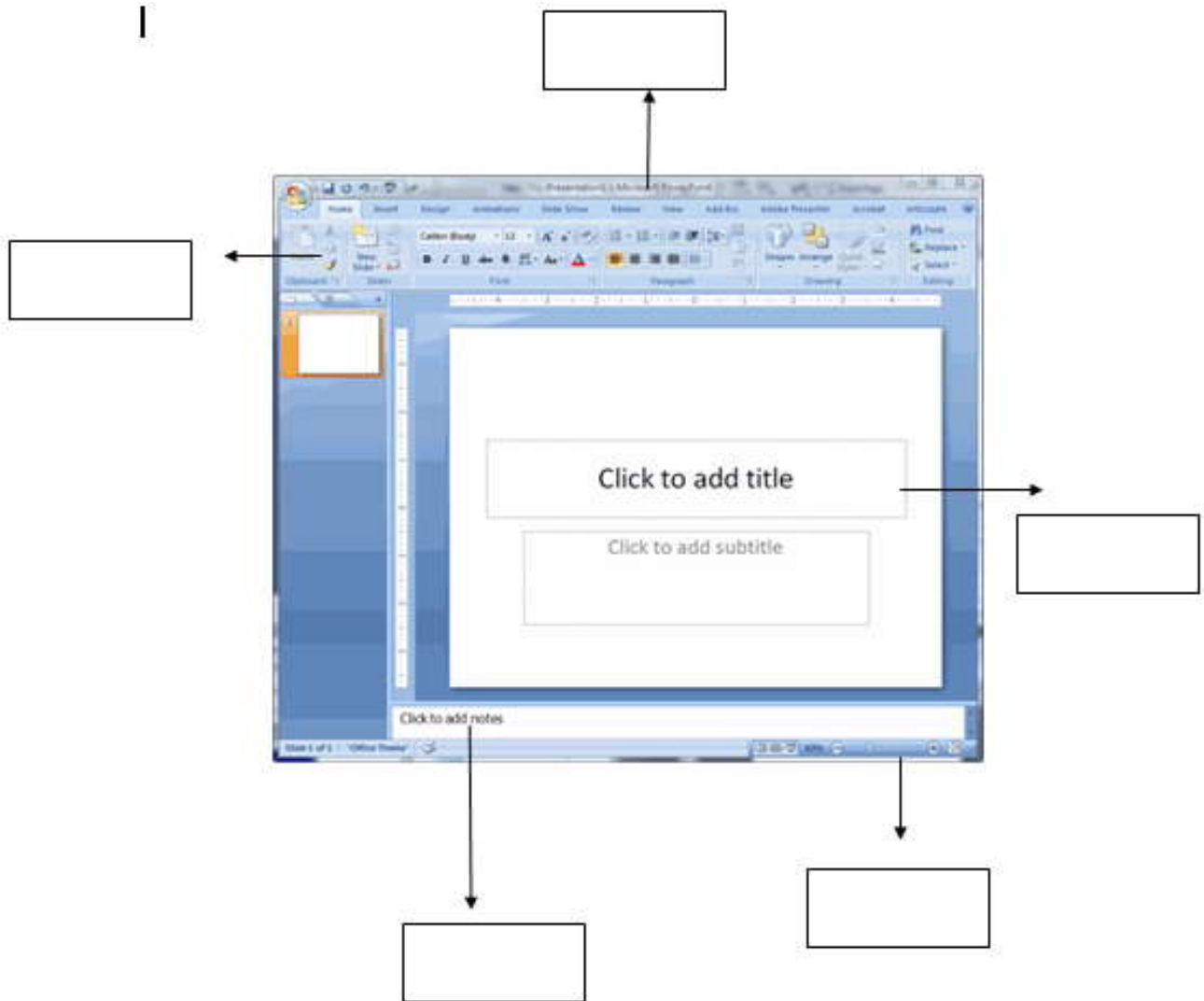
- a. Ctrl+S
- b. Ctrl +R
- c. Ctrl+W
- d. Ctrl+V

5. Which of the following task can be done using the view tab?

- a. Full screen view
- b. Zoom in
- c. Zoom out
- d. All of these

5. Label the parts by choosing the correct option from the given box:

**Title Bar, Ribbon, Document area, Zoom Control, Notes Pane**



6. What is use of color picker tool ?

---

---

---

---

---

Teacher's Signature :

Parent's Signature :

# OPEN MINDS - A BIRLA SCHOOL, KANKARBAGH

NAME : \_\_\_\_\_

DATE : \_\_\_\_\_

Subject : MATHEMATICS

GRADE - 3

## HOME ASSIGNMENT

1. Using the calendar of January 2018 , answer the following :

Ex: The first Sunday = 7<sup>th</sup> of January

(a) The last Monday =

(b) The second Friday =

(c) The second Tuesday =

(d) The third Wednesday =

2. Write in columns and add :

(a) 5kg 175g , 7kg 295g and 8kg 200g


(b) 14 l 670 ml , 27 l 565 ml and 7 l 200 ml

3. A van carries 66kg of soap. It delivers soap weighing 4kg 450g to a shop. Find the quantity of soap left in the van.

Teacher's Signature :

Parent's Signature :



4. If  = 10 circles, draw the circles to complete the following.

Ex:- 20 circles. =



(a) 40 circles =

(b) 80 circles =

(c) 100 circles =

(d) 50 circles =

**5. Draw the clock face to show the following time.**

a. 10:40 =

b. 8:50 =

**6. Complete the following.**

a. 5 min 5 sec into sec = \_\_\_\_\_ sec.

b. 6 days = \_\_\_\_\_ hr.

c. 4 years = \_\_\_\_\_ days.

d. 20 weeks = \_\_\_\_\_ days.

e. 9kg = \_\_\_\_\_ g.

f. 4kg 400g = \_\_\_\_\_ g.

**7. If 1 jug holds 800ml of water. the quantity of water will be there in ?**

a. 4 jugs = \_\_\_\_\_ ml

b. 5 jugs = \_\_\_\_\_ ml

c. 9 jugs = \_\_\_\_\_ ml

d. 20jugs = \_\_\_\_\_ ml

**8. If Ramesh studies 4 hours in a day, how many hours will he be studying in 10 a days ?**

Teacher's Signature :

Parent's Signature :

# OPEN MINDS - A BIRLA SCHOOL, KANKARBAGH

NAME : \_\_\_\_\_

DATE : \_\_\_\_\_

Subject : ELA

GRADE - 3

## HOME ASSIGNMENT

### 1. Fill in the blanks with the advferbs from the bracket :-

- a) The stars shone \_\_\_\_\_ in the sky.(bright)
- b) He walked \_\_\_\_\_ on the stairs. (slow)
- c) He \_\_\_\_\_ climbed down from the tree.(careful)
- d) She \_\_\_\_\_ confronted the dragon.(brave)
- e) He studies \_\_\_\_\_ in the class.(good)

### 2. Make sentences from the following words :-

a) burglar

\_\_\_\_\_

b) careful

\_\_\_\_\_

c) brave

\_\_\_\_\_

d) swift

\_\_\_\_\_

e) robbery

\_\_\_\_\_

### 3. Punctuate the sentences with full stops and capital letters :

a) we will visit the doctor today

\_\_\_\_\_

b) he is going to delhi tomorrow

\_\_\_\_\_

c) the phone is ringing

\_\_\_\_\_

d) shivani, twinkle and shamita are my best friends

\_\_\_\_\_

e) do you love pets

\_\_\_\_\_

Teacher's Signature :

Parent's Signature :

**4. Circle the “when” adverbs in the following sentences :-**

- a) I went there yesterday.
- b) He is going to Delhi tomorrow.
- c) She called him a few minutes ago.
- d) She comes here daily.
- e) You may leave soon.

**5. Fill in the blanks with “how” adverbs :-**

- a) She is singing the song \_\_\_\_\_ (happy)
- b) He is reading \_\_\_\_\_ (quiet)
- c) Riya is walking \_\_\_\_\_ (slow)
- d) The students are solving the sum \_\_\_\_\_ (quick)
- e) She waited \_\_\_\_\_ to meet the doctor.(patient)

**6. Learn the spellings 75 - 90 from ELA spelling list.**

# OPEN MINDS - A BIRLA SCHOOL, KANKARBAGH

NAME : \_\_\_\_\_

DATE : \_\_\_\_\_

Subject : HINDI

GRADE - 3

## HOME ASSIGNMENT

1. वाक्यों में सही सर्वनाम शब्द भरें :-

कुछ, वह, जो, को, तुम, स्वयं, आप

(क) \_\_\_\_\_ मेरी बहन छाया है ।

(ख) \_\_\_\_\_ क्या बना रही है ।

(ग) \_\_\_\_\_ कही जा रही हो ।

(घ) तुम्हे अपना काम \_\_\_\_\_ करना चाहिये ।

(ड.) \_\_\_\_\_ गा रहा है \_\_\_\_\_ गायक है ।

(च.) माँ मुझे खाने के लिए \_\_\_\_\_ दे दीजिये ।

2. अशुद्ध शब्दों को शुद्ध करके लिखें :-

क. किरण \_\_\_\_\_

ख. दुनिया \_\_\_\_\_

ग. बिस्तार \_\_\_\_\_

घ. नसता \_\_\_\_\_

ड. पीताजी \_\_\_\_\_

3. विराम चिन्ह का नाम लिखें :-

क. ? - \_\_\_\_\_

ख. | - \_\_\_\_\_

ग. , - \_\_\_\_\_

Teacher's Signature :

Parent's Signature :

4. दिये गये शब्दों के अर्थ लिखें :-

(क) रसभरियाँ - \_\_\_\_\_

(ख) कोलाहल - \_\_\_\_\_

(ग) सूर्यग्रहण - \_\_\_\_\_

(घ) प्रकाश - \_\_\_\_\_

5. ध्यानपूर्वक पढ़ें और समझें :-

क. प्रश्न पूछने के लिये - प्रश्नवाचक (?)

ख. हर्ष प्रकट करने के लिये - विस्मयबोधक (!)

ग. वाक्य समाप्त होने के लिये - पूर्णविराम (।)

घ. थोड़ा रूकने के लिये - अल्पविराम (,)

6. इल्ली के जीवन चक्र का वर्णन करें :-

7. वर्तनी शब्द कोश से 75-90 तक याद करें ।