

OPEN MINDS - A BIRLA SCHOOL, KANKARBAGH

NAME : _____

DATE : _____

Subject : EVS

GRADE - 4

HOME ASSIGNMENT

1. Fill in the blanks :

- The _____ Bihu is celebrated to mark the end of the harvesting season.
- _____ had founded the khalsa- the sikh brotherhood.
- The third day of the Pongal is known as the _____ pongal.
- 5th September is observed as the _____ day every year.
- Onam is celebrated in the state of _____

2. State whether the statment is true or false.

- Nagaland is home to 16 major tribes and many sub- tribes.()
- The Pushkar Camel Fair is held in the town of Ajmer every year.
()
- Baisakhi is celebrated in the states of Haryana and Punjab.
()
- The Hornbill festival is celebrated in Nagaland. ()
- The Vanmahotsav is celebrated in the first week of July in India.
()

3. Match the following :

COLUMN - A

- Bihu
- Pongal
- Onam
- Baisakhi
- Teacher's day

COLUMN - B

- 5th Sep.
- Punjab
- Assam
- Tamil Nadu
- Kerela

Teacher's Signature :

Parent's Signature :

4. Paste the pictures of any four harvest festivals and name them :

a)

b)

c)

d)

5. Answer in one word :

a) A religious festival_____.

b) A regional festival_____.

c) The state in which Hornbill festival is celebrated_____.

d) The Bihu which is celebrated to mark the sowing of the seeds
_____.

e) The tree planting festival of India_____.

Teacher's Signature :

Parent's Signature :

6. Draw a neat and well labelled diagram of the solar system.

Teacher's Signature :

Parent's Signature :

OPEN MINDS - A BIRLA SCHOOL, KANKARBAGH

NAME : _____

DATE : _____

Subject : ICT

GRADE - 4

HOME ASSIGNMENT

1. Fill in the blanks using the correct words :

Line, Font, Default, HOME, Paragraph, Justify

- a. Any settings that are standard or pre-defined in software are called _____ Settings.
- b. The most commonly used character formatting options are contained in the _____ group of the _____ tab.
- c. In the _____ alignment, the text is aligned with both the margins.
4. _____ spacing is the amount of white spaces between the lines of text in a paragraph.

2. State T for True and F for False statements :

- (a) Multimedia technology is used to create special effects in movies. _____
- (b) Multimedia is used to make learning fun for students. _____
- (c) E-books are books in electronic form that you can read on a computer. _____
- (d) A multimedia computer need not have a CD/DVD drive. _____

3. Choose the correct option :

1. Which of the following are elements of multimedia?
a. Text b. Graphics c. Animation d. All of these
2. Multimedia is used in which of the following fields?
a. Education b. Advertising
c. Entertainment d. All of these
3. Which of the following are the audio element of multimedia content?
a. Music b. Sounds c. Speech d. All of these
4. When you watch a movie on a television, it is an example of which type of multimedia?
a. Interactive b. Non-interactive
c. Both (a) and (b) d. None of these

Teacher's Signature :

Parent's Signature :

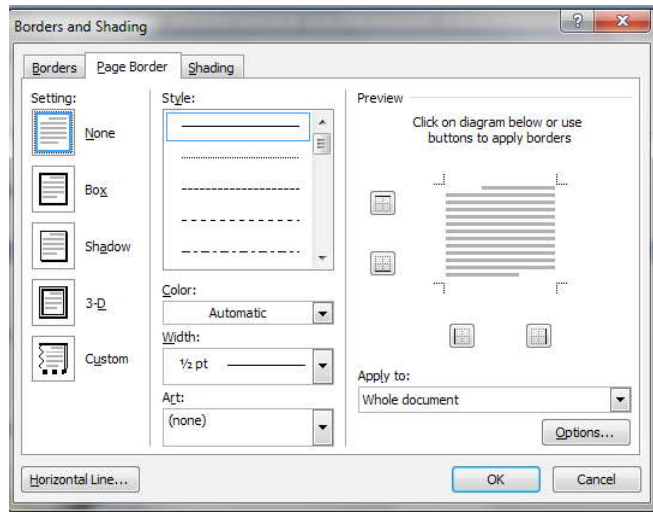
4. Identify the figures and write their names accordingly using the correct words :

Windows Media, Player window, Format Painter
Borders, Shading dialog box

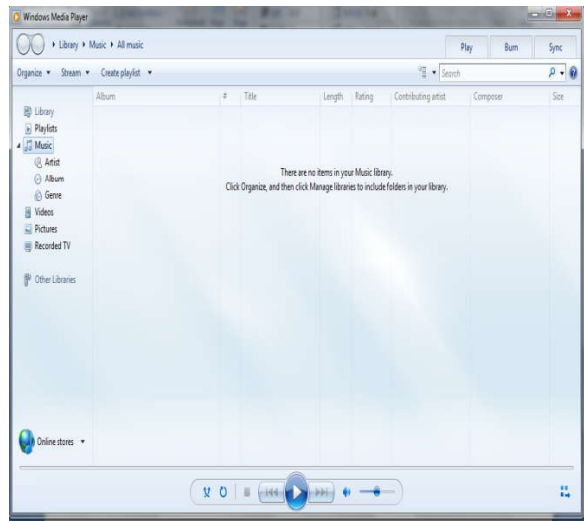
(a)



(b)



(c)



5. Write the keyboard shortcuts of the following :

(a) Align the text to the left margin. _____

(b) Double line spacing between the lines of text. _____

(c) 1.5 line spacing between the lines of text. _____

(d) Align the text to the center of the page. _____

6. What is formatting ?

7. What is animation ?

8. Give an example of a multimedia software.

9. Fill in the blanks using the correct words :

- (a) A combination of text and _____ is the simplest form of multimedia.
- (b) _____ refers to the process of creating movement using still images.
- (c) _____ multimedia does not involve any user participation.
- (d) _____ multimedia gives users control over any or all media elements.

10. State T for True and F for False statements :

- (a) To place the text below the line of the normal text, use the superscript action. _____
- (b) To open the Font dialog box, click the Font group on the HOME tab. _____
- (c) You can apply effects such as shadow, glow and reflection in a document using the Text Effects button. _____
- (d) Aligning is a formatting property that adds a coloured background to text. _____

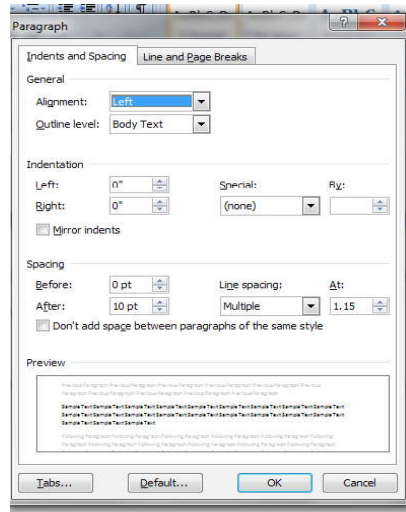
11. Choose the correct option :

- 1. The Text Highlight Color button is in the _____ group.
a. Font b. Paragraph c. Styles d. Page Setup
- 2. Which of these is not an alignment option in Word ?
a. Align Left b. Align Right
c. Align Top d. Center
- 3. Which of the following options makes the first character in a selected sentence uppercase, and the rest lowercase?
a. Capitalize each word b. tOGGLE cASE
c. Sentence case d. None of these
- 4. You can see the effect of applying border and shading to a selection in the _____
a. Font dialog box b. Paragraph dialog box
c. Preview box d. None of these

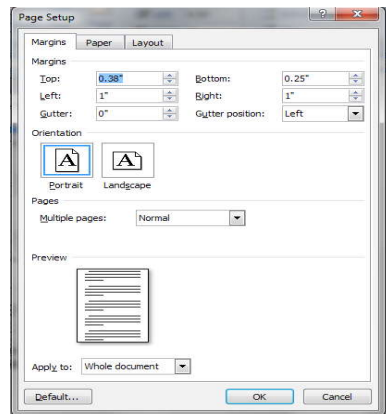
12. Identify the figures and write their names accordingly using the correct words.

Page Setup dialog box Paragraph dialog box
Fill Effects dialog box

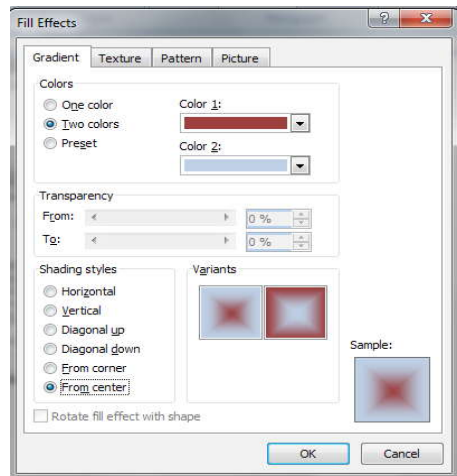
(a)



(b)



(c)



13. Write the keyboard shortcuts of the following :

(a) To open the Font dialog box. _____

(b) Single line spacing between the lines of text. _____

(c) To make any character in bold face. _____

(d) Align the text between both the margins. _____

14. List the types of multimedia.

15. Give examples of interactive and non – interactive multimedia.

16. Write the applications of multimedia.

OPEN MINDS - A BIRLA SCHOOL, KANKARBAGH

NAME : _____

DATE : _____

Subject : MATHEMATICS

GRADE - 4

HOME ASSIGNMENT - 1

1. Complete the following :

- Number symbol X of Roman number can be repeated only _____ times.
- The Roman numeral system uses only ____, ____ and ____ letters before larger value symbols.
- The boiling point of water in Roman system is written as _____ °F.
- Symbols _____, _____, _____ and _____ are only repeating in Roman numerals.

2. Compare using < , > or = :

CM _____ D+CC

LII _____ XX+ VII

MXX+CX _____ MCCL

CCV+C _____ CDL

3. Find :

10°C warmer than 26°C = _____

17°C cooler than 45°C = _____

5°C warmer than 36°C = _____

23°C cooler than 30°C = _____

4. Complete the following :

Number	Roman Numeral
480	
105	
282	
171	
509	

Teacher's Signature :

Parent's Signature :

A fraction is called a **proper fraction** if the numerator is less than the denominator. A fraction is called an **improper fraction** if the numerator is either greater than or equal to the denominator. A fraction which is made of a whole number and a proper fraction is called a **mixed fraction**.

5. Complete the table using the given fractions :

$\frac{5}{2}$, $\frac{1}{2}$, $\frac{2}{3}$, $\frac{1}{5}$, $\frac{4}{3}$, $\frac{12}{7}$, $\frac{3}{9}$, $6\frac{1}{6}$, $\frac{8}{5}$

Proper Fraction	Improper Fraction	Mixed Fraction

6. Express the following as mixed fraction :

Ex - $\frac{25}{3} = 8\frac{1}{3}$

$\frac{9}{2} =$

$\frac{19}{4} =$

$\frac{29}{3} =$

$\frac{27}{6} =$

7. Fill in the blanks :

$\frac{13}{7} = \frac{65}{\quad}$

$$\frac{29}{32} = \frac{\quad}{96}$$

$$\frac{7}{5} = \frac{14}{\quad}$$

$$\frac{9}{11} = \frac{\quad}{99}$$

8. Write the correct sign , > or < :

CXVII _____ CXIV

D+D _____ M

C+CL _____ CCC-XX

CLXX+L _____ D-CC

OPEN MINDS - A BIRLA SCHOOL, KANKARBAGH

NAME : _____

DATE : _____

Subject : ELA

GRADE - 3

HOME ASSIGNMENT

A. Complete each sentence by changing the verb into its past.

1. My dad _____ (craft) a boat.
2. He _____ (paint) the house.
3. I _____ (watch) television in the morning.
4. Grandma _____ (bake) the best cookies.
5. I _____ (pack) my bags.
6. We _____ (serve) lunch at 12:30.
7. The train _____ (stop) in New York.
8. Anna _____ (hike) up the mountain.
9. Every night, I _____ (open) my book.
10. I _____ (wave) to my sister.

B. Write the homophone for each word below.

1. cell - _____
2. meat - _____
3. dear - _____
4. heal - _____
5. stair - _____
6. tail - _____
7. hour - _____
8. to - _____
9. not - _____
10. see - _____

Teacher's Signature :

Parent's Signature :

C. Fill in the blanks with correct preposition.

1. She lives _____ Dehradun.
2. I am going _____ work.
3. We took a ferry _____ the river.
4. I will see you _____ Tuesday.
5. The train is _____ 5:10 am.
6. Manish lives _____ in the hill.
7. They rowed the boat _____ the river.
8. My brother is coming _____ Monday.
9. My exams are commencing _____ tomorrow.
10. We were _____ a dark tunnel.

D. Write the superlative form of the following.

1. happy – _____
2. comfortable – _____
3. beautiful – _____
4. ugly – _____
5. short – _____
6. cozy – _____
7. dirty – _____
8. handsome – _____
9. long – _____
10. tiny – _____

E. Complete the following exercise filling in the correct words from the Word Box.

life, nine ears, twice night cage, suppers, cellar dreams, sophie, net, giants, elephant caterpillars, ladybird, skirt, greece, orphanage

The giant kidnapped _____ because she had seen him.

He reasoned that humans don't believe _____ exist, and if she saw him, she would soon tell others. The giant thought if that happened he could be caught and put in a _____. The giant told her that she would have to stay with him for the rest of her _____.

The giants outside the cave were all naked except for a sort of short _____ around their waists. There were _____

giants altogether. They were just waiting for the _____ to come. Then they would gallop off to find their _____. The other giants were _____ as tall as the BFG.

The giants visited every country except _____. It turned out that the giant had taken Sophie from the village _____.

There, when the children were bad they were locked in a dark _____.

The giant said he would tell Sophie what he was doing in the village if she would get him an _____ to ride on. It turned out the BFG was blowing _____ into the bedrooms of the village children.

Because of his enormous _____ he was able to hear dreams in the air about him and catch them with a _____.

He was even able to hear the footsteps of a _____ walking across a leaf. The BFG considered the _____ to be the biggest chatterboxes.

F. Fill in the blanks using the present continuous form of the verbs given in the brackets.

- a. My sister _____ a marathon. (run)
- b. She _____ for Nepal next week. (leave)
- c. These girls _____ for a picnic next week.
(go)
- d. I _____ to my uncle after receiving his gift. (write)
- e. She _____ a magazine. (read)
- f. I _____ my friends tonight. (meet)
- g. He _____ us an experiment this evening. (show)
- h. My father _____ to Hyderabad tomorrow. (go)
- i. Your parents _____ the shed. (repair)
- j. I _____ lunch. (eat)

OPEN MINDS - A BIRLA SCHOOL, KANKARBAGH

NAME : _____

DATE : _____

Subject : HINDI

GRADE - 4

HOME ASSIGNMENT

पढ़कर याद करें :-

1. उपसर्ग - वे शब्दांश जो शब्दों के मूल रूप के प्रारंभ में जुड़ कर शब्द में परिवर्तन कर देते हैं उन्हें उपसर्ग कहते हैं, जैसे

प्र० प्रभाव प्रज्ञा अधि - अधिग्रहण अधिकार
प्रारंभ प्रबुद्ध अभि - अभिप्राय अभियान

2. प्रत्यय - वे शब्दांश जो शब्दों के अंत में जुड़कर उसके अर्थ में परिवर्तन लाते हैं वे प्रत्यय कहलाते हैं।

ईय पठनीय वर्णनीय गमनीय वदनीय
अक्कड़- भुलक्कड़, घुमक्कड़
वान- गाड़ीवान, कोचवान गुणवान

3. विलोम शब्द लिखें (एक-एक)

क. प्रकाश -
ख. आदान -
ग. उचित -
घ. आदि -
ङ. नवीन -
च. सत्य -
छ. सजीव -

4. समानार्थी शब्द लिखें

रवि -
पुष्प -
व्योम -
नदी -
समुद्र -

5. शब्दार्थ लिखें

रेंगना

क. करामात - ख. आसमान -
ग. संसार - घ. तलाश -
ङ. आश्चर्य - च. कुशल -
छ. प्रतिदिन - ज. निहारना -

Teacher's Signature :

Parent's Signature :

6. वर्तनी शब्दकोश से 75 - 90 तक याद करें।

Teacher's Signature :

Parent's Signature :